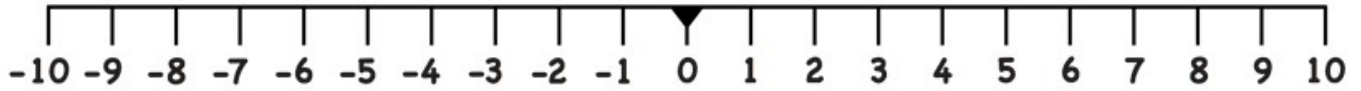


1) $x < 4$



2) $x \leq 4$



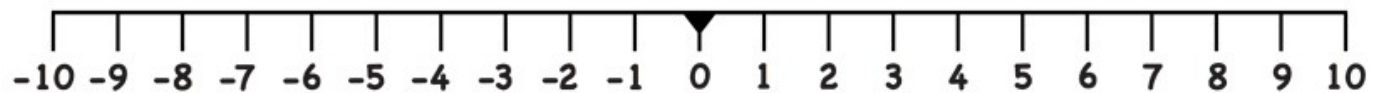
3) $x < -4$



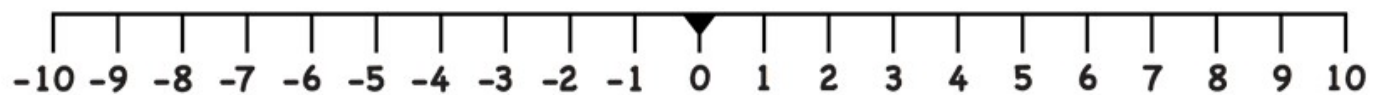
4) $x \leq -4$



5) $x > 5$



6) $x \geq 5$



7) $x > -5$



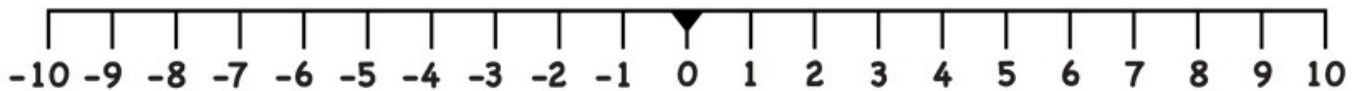
8) $x \geq -5$



9) $x \leq -5$



10) $x \leq 0$



11) $x \leq 7$



12) $x \geq 6$



13) $x \geq -2$

